



TIME


White
Rose
Maths




From White Rose Maths schemes for Year 1 Summer Term

BLOCK 6 - TIME


1 Match the clocks to the times.



eight o'clock




six o'clock



one o'clock

2 Tick the time shown on the clock.



six o'clock

half past three

three o'clock

3 Circle to show when each activity happens.



breakfast

morning

evening



go to school

morning

evening




bedtime

morning

evening

4 Fill in the missing days of the week.

Wednesday



Thursday

Saturday

Sunday




Tuesday

5 Today is Monday.

Dan went to the zoo yesterday.

What day did Dan go to the zoo?



Dan went to the zoo on _____

6 Use the word bank to help you complete the sentences.

minutes


seconds

hours


Playtime lasts for about 15 _____

I can count to 10 in less than 5 _____


7 This is what Sam does on Saturday.



watch TV - one hour



ride her bike - 2 hours



walk the dog - 30 minutes

Circle the activity that takes the longest time.

Answers

